

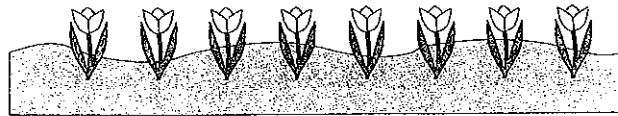


DIRECTIONS: Answer each question by marking the same numbered item on the answer sheet. Fill in each circle completely. Erase to change an answer. Any answers left blank will be graded as incorrect.

1. Quot flores in pictura sunt?

Quot = how many

- A. tres
- B. quattuor
- C. quinque
- D. octo



2. Septem minus tres sunt ____.

- A. quattuor
- B. quinque
- C. novem
- D. decem

3. The Roman numeral CXLIV translates to ____ in Arabic numerals.


- A. 164
- B. 166
- C. 144
- D. 146

4. Select the correct numeral to complete the sequence.

VII...IX...XI...XIII... ____

- A. XVIII
- B. XV
- C. XIX
- D. XVI

5. In the picture below, the lion is in the ____ position.



- A. nonus
- B. octavus
- C. septimus
- D. decimus



6. Which of the following animals has quattuor pedes?

Pedes = feet

- A. aranea
- B. serpens
- C. formica
- D. equus

7. The *Tres Parvi Porci* had to overcome the ____.


- A. magnos et malos aves
- B. parvum et malum taurum
- C. magnum et malum lupum
- D. parvos et malos pisces

8. Which of the following constellations does *not* represent an animal?

- A. Leo
- B. Libra
- C. Cancer
- D. Serpens

9. The body part marked with an "X" is the ____.

- A. oculus
- B. nasus
- C. collum
- D. lingua



10. The body part marked with a "Y" is the ____.

- A. pes
- B. genu
- C. caput
- D. bracchium

11. The garment being worn in the picture above is a ____.

- A. toga
- B. stola
- C. tunica
- D. petasus

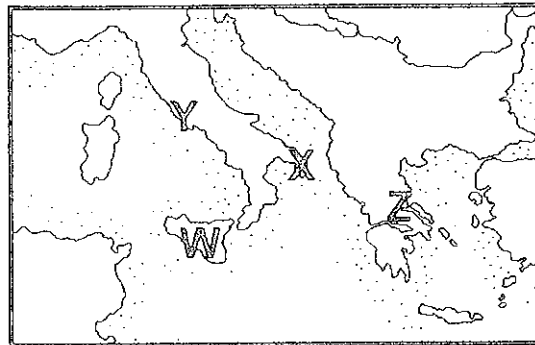


12. Which of the following family members is not female?
- A. mater
B. soror
C. frater
D. amita
13. Little Red Riding Hood went to her grandmother's house.

- A. matris
B. aviae
C. patris
D. filiae

14. On the map to the right, the city of Rome is located near the area marked with ____.

- A. a "W"
B. an "X"
C. a "Y"
D. a "Z"



15. The colors on the American flag are ____.
- ☒ A. ruber et albus et caeruleus
B. ruber et albus et flavus
C. ater et albus et flavus
D. ruber et ater et caeruleus
16. A correct reponse to "Quot annos natus es?" would be your ____.
- A. address
B. state of health
C. age
D. teacher's name
17. If you are told, "Ambula ad fenestram," you should ____.
- A. raise your hand
B. walk to the window
C. walk to the door
D. sit down at your desk




18. "Duo fratres mihi sunt," indicates that ____.

- A. you have two friends
- B. your brother is two years old
- C. you have two hours free
- D. you have two brothers

19. Column C is an example of the ____ order.

- ☒ A. Corinthian
- B. Ionic
- C. Tuscan
- D. Doric



20. The Latin motto of the United States is ____.

- A. e pluribus unum
- B. semper fidelis
- C. semper paratus
- D. adeste fideles

21. A Latin expression meaning "beware of the dog" is ____.


- A. caveat emptor
- B. cave canem
- C. carpe diem
- D. labor omnia vincit

22. The Circus Maximus was designed for ____.

- A. performing animals
- B. gladiator fights
- C. professional plays
- D. chariot races

23. The two-faced deity pictured to the right is ____, the Roman god of doorways and beginnings.

- A. Jupiter
- B. Pluto
- C. Apollo
- D. Janus





24. The Roman goddess Diana is associated with ____.

- A. the moon and wild animals
- B. hearth and home
- C. love and beauty
- D. wisdom, crafts, and strategic war

25. Look at the chart below.

SPANISH	FRENCH	ITALIAN
<i>nariz</i>	<i>nez</i>	<i>naso</i>

Each of these words is derived from the Latin word for ____.


- A. name
- B. nose
- C. teacher
- D. frog

26. An *octogenarian* is a person who ____.

- A. collects aquatic life forms
- B. is very rich
- C. is eighty years-old
- D. has difficulty sleeping


27. In pictura "X" ____.

- A. *Ursus in saxo sedet.*
- B. *Ursus flores tenet.*
- C. *Ursus arborem ascendit.*
- D. *Ursus in herbis currit.*



28. In pictura "Y" ____.


- A. *Ursus in saxo sedet.*
- B. *Ursus arborem ascendit.*
- C. *Ursus flores tenet.*
- D. *Ursus per herbas currit.*





29. Porcus ____ in caelo spectat.

- A. solem
- B. lunam
- C. nubes
- D. stellas



30. *Flavius multos numeros in tabula scribit.* Flavius is ____.

- A. doing his math
- B. playing ball with his friends
- C. giving a book report
- D. setting the table for dinner

FINIS